





The Three Little Pigs Comparing Numbers



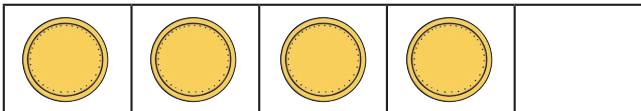
Which pig has **more** tools? Circle it.



Which pig has **fewer** building materials? Circle it.



Draw some coins in the five-frame so the wolf has **fewer** coins than the pig.



Draw some flowers in the five-frame so the stick house has the **same** number of flowers as the brick house.

